




Name millie

How could Annie Ross spend **\$100** from Pretzelvania?

 = \$20

 = \$10

 = \$50

 = \$10

Hand-drawn diagrams illustrating combinations of items that sum to \$100:

- $20 + 20 + 50 + 10 = 100$ (bread, bread, house, hat)
- $20 + 10 + 50 + 10 = 100$ (bread, hat, house, book)
- $10 + 10 + 50 + 20 = 100$ (hat, hat, house, bread)
- $50 + 20 = 100$ (house, book)
- $50 + 20 + 10 + 10 = 100$ (house, bread, hat, hat)
- $50 + 20 + 10 + 10 = 100$ (house, bread, hat, book)